

**Section – I (12× ½ = 6)**

Note: (i) Answer all the questions.

(ii) Each question carries ½ mark.

- German word Trade means
- Expand NIN
- Heathrow airport is located in  
A) UK            B) UAE            C) Egypt            D) USA
- Name any two peninsular tributaries of River Ganga
- Find the odd one out  
A) Infosys            B) Ranbaxy            C) Sundram Fasteners            D) Cargil Foods
- The eastern most longitude of India is
- The National Food Security Act was passed in the year.
- RTE Act – 2009  
Emigration Act - ?
- The standard calories for people in rural area is
- Tyre centre settlements have 200 – 500 Kopsis,            Gadi centres have            ?
- GDP is made up of production from Agriculture, Industry,            ?
- a) Massai Warrior in Kenya            c) Gaucho in South America  
b) Yurta Kazakhstan            d) Qiang tribes in ?

**Section – II (8× 1 = 8)**

Note: (i) Answer all the questions.

(ii) Each question carries 1 mark.

13. Observe the following information and draw a Pie chart.

Year	Agriculture	Industry	Service
1972 – 73	74%	11%	15%
2009 – 10	53%	22%	25%

- Define GDP.
- What is meant by birth rate?
- Write two sentences about organic farming
- Expand ICDS.
- What is disguised unemployment?
- Observe the following chart and answer the question.

Area	Haryana	Punjab	Kerala	Andhra Pradesh
Sex Ratio	879	895	1034	?

20. Write any two differences between weather and climate.

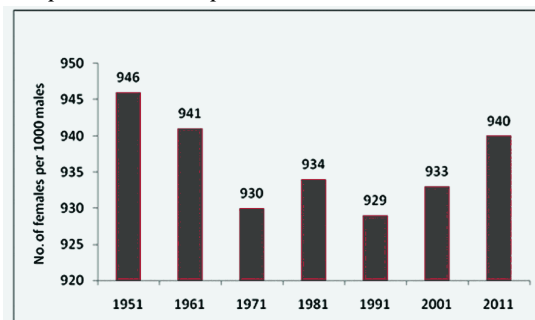
**Section – III (8× 2 = 16)**

Note: (i) Answer all the questions.

(ii) Each question carries 2 marks.

- What is an aerropolis? How is it structured?
- What are the different in flow and out flow processes in the context of water resources?
- Observe the following graph and answer the questions.

Graph 2 : India Population : Sex Ratio, 1951 - 2011

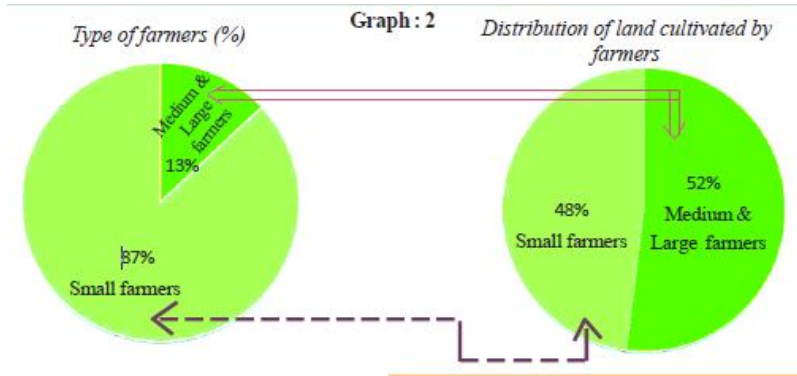


- What does the graph show?
- What is meant by sex ratio?

24. What is the influence of the Himalayas on Indian Agriculture?

25. Water a natural resource for production, particularly agriculture production, now requires greater capital for its use. Can you explain the statement.

26. Observe the following graph and explain it.



27. What is the relationship between woman's work outside their homes and gender bias?

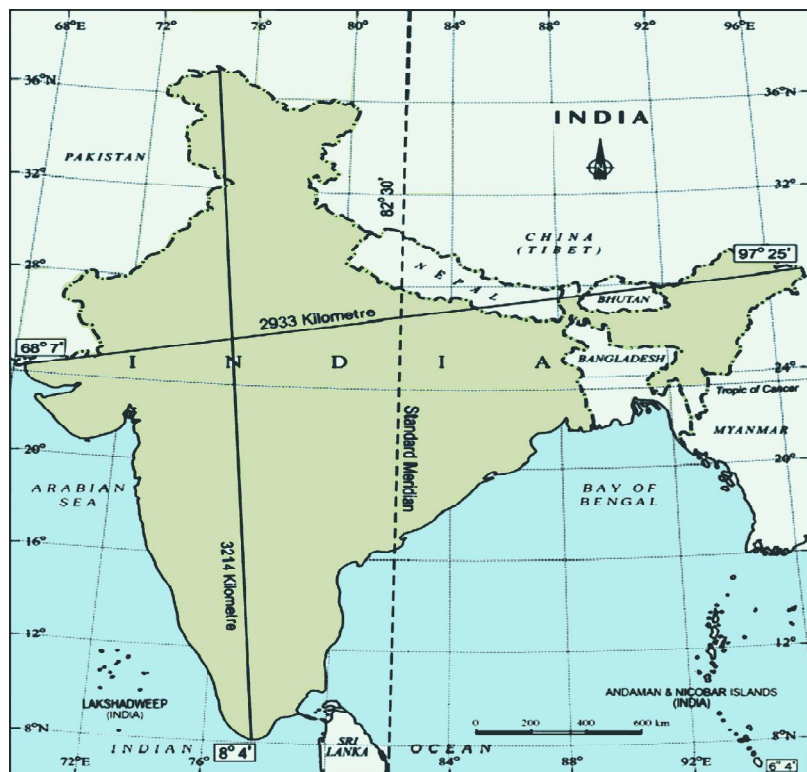
28. Describe the relationship between increase in food production and food security?

### Section – IV( 5×4 = 20)

Note: (i) Answer all the questions in Internal Choice.

(ii) Each question carries 4 marks.

29. A) observe the following map and answer the questions.



- Which meridian is taken as standard meridian in India?
- Write the names of any two neighbouring countries of India on the North.
- Mention the location of India.
- Name the island groups of India.

(OR)

B) Explain the Monsoon mechanism in India.

30. A) 'Most children of Migrant families become drop outs'. Do you agree with this statement? Justify your answer.

(OR)

B) Which aspects of farming practices were regulated in the context of Hiware Bazar to improve the water conservation?

31. A) Do you think the classification of economic activities in to primary, secondary and services sectors is useful? Explain how.

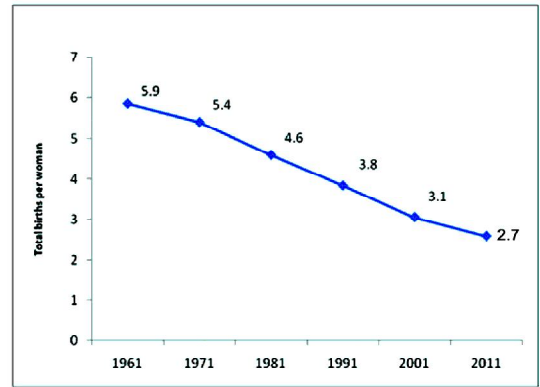
(OR)

B) What are the lessons to be drawn from the alternate PDS initiative at Zaheerabad mandal in Telangana?

32. A) Observe the following graph and answer the questions.


Graph 4 : Fertility Rate in India, 1961 -2011

- i) What does the graph show?
- ii) What is meant by fertility rate?
- iii) Which trend you observe from 1961 – 2011?
- iv) Write down the fertility rate of India and Andhrapradesh in 2011.



(OR)

B) Observe the following graph and write a brief note on the inequality in India.



33. Locate the following places in the given India Map given.

**Group – A**

- 1) Largest peninsular river
- 2) Strait separate India from Srilanka
- 3) Plateau rich in Minerals
- 4) Highest peak in the Himalayas

**Group – B**

- 1) Simla
- 2) Hill station in Nilgiris
- 3) Sea port in Andhra Pradesh
- 4) Bhopal